


Year 5 Arithmetic Week Beginning 11th January

Orange group answers

Monday

a) What number is represented?



39

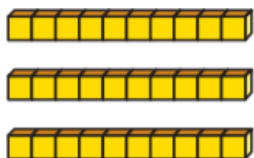
Subtract 12

What number is left?

27

$$\boxed{39} - 12 = \boxed{27}$$

b) What number is represented?



31

Subtract 12

What number is left?

19

$$\boxed{31} - 12 = \boxed{19}$$

a) $23 - 6 =$

d) $45 - 26 =$

b) $33 - 7 =$

e) $63 - 35 =$

c) $33 - 17 =$

f) $82 - 24 =$

Tommy is working out $43 - 5$

		T	O	
		3 4	13	
	-		5	
		3	8	

Tommy is correct

a)

		T	O	
		2	3	
	-		6	
		1	7	

d)

		T	O	
		4	5	
	-	2	6	
		1	9	

b)

		T	O	
		3	3	
	-		7	
		2	6	

e)

		T	O	
		6	3	
	-	3	5	
		2	8	

Dexter has 33 bricks.



Rosie has 19 bricks.

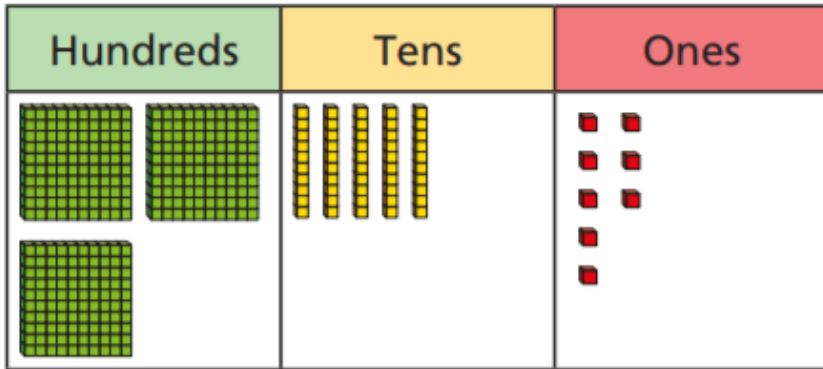


a) How many bricks do Dexter and Rosie have altogether?

Answer = 52

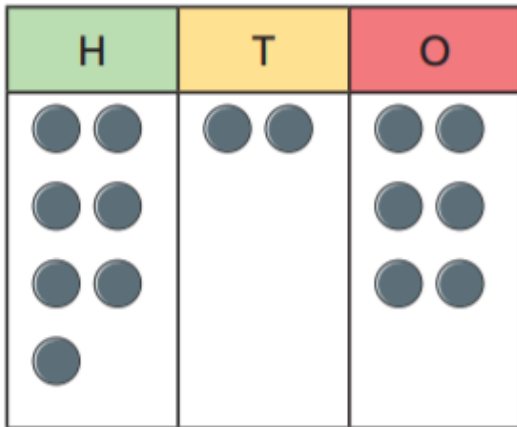
Complete the column subtractions.

a) $358 - 226$



		H	T	O	
		3	5	8	
	-	2	2	6	
		1 3 2			

b) $726 - 303$



		H	T	O	
		7	2	6	
	-	3	0	3	
		4 2 3			

A TV costs £120 less than this computer.

How much does the TV cost?



£379


Year 5 Arithmetic Week Beginning 11th January

Orange group tasks

Tuesday

Complete the number sentences.

a) $323 - 60 =$



b) $712 - 40 =$

H	T	O

Complete the number sentences.

a) $720 - 60 =$ **660**

e) $716 - 50 =$ **666**

b) $338 - 40 =$ **298**

f) **438** $= 528 - 90$

c) $248 - 60 =$ **188**

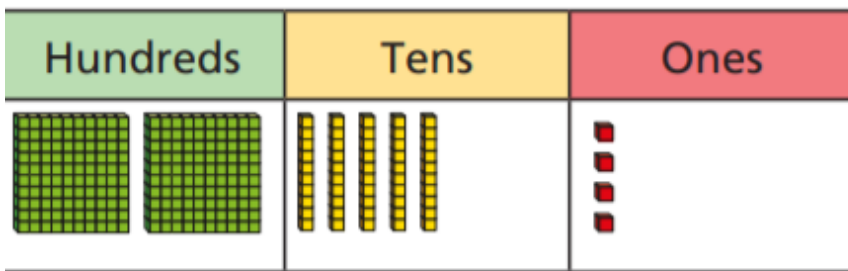
g) $319 - 20 =$ **299**

d) $937 - 50 =$ **887**

h) $703 - 80 =$ **623**

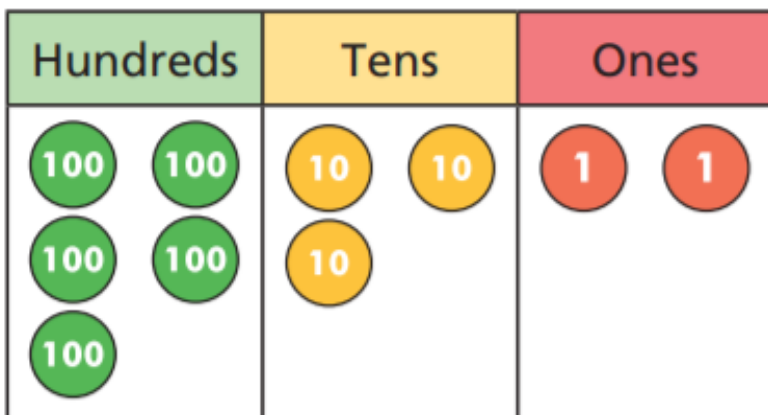
Complete the column subtractions.

a) $254 - 126$



		H	T	O	
		2	5	4	
	-	1	2	6	
		1	2	8	

b) $532 - 281$



		H	T	O	
		5	3	2	
	-	2	8	1	
		2	5	1	

Work out the subtractions.

a) $735 - 218$

		H	T	O	
		7	3	5	
	-	2	1	8	
		5	1	7	

c) $415 - 179$

		H	T	O	
		4	1	5	
	-	1	7	9	
		2	3	6	

b) $428 - 163$

		H	T	O	
		4	2	8	
	-	1	6	3	
		2	6	5	

d) $382 - 194$

		H	T	O	
		3	8	2	
	-	1	9	4	
		1	8	8	

Two points are marked on a number line.

Answer = 677



What is the difference between the two points?

Aisha buys these items.



How much change does she have from £1,000?


Answer = 188

Please pause and complete these tasks with Mrs Furby on the live zoom lesson


Work out the subtractions.

Use the number lines to help you.

a) $0.9 - 0.2 =$

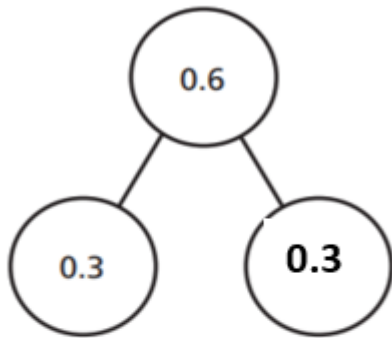


b) $0.8 - 0.1 =$



Complete the part-whole models.

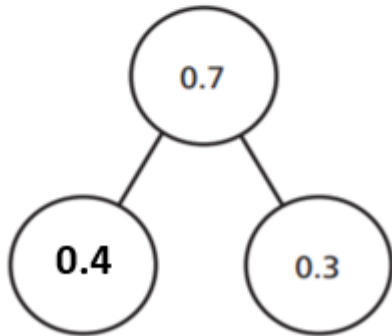
a)



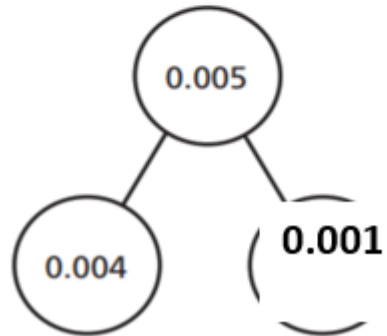
c)



b)



d)



a)

		0	.	8	9
	-	0	.	4	
		<hr/>			
		0	.	4	9
		<hr/>			

c)

		0	.	7	7
	-	0	.	6	8
		<hr/>			
		0	.	0	9
		<hr/>			

b)

		0	.	7	7
	-	0	.	6	4
		<hr/>			
		0	.	1	3
		<hr/>			

d)

		0	.	7	
	-	0	.	2	5
		<hr/>			
		0	.	5	5
		<hr/>			

