

Year 5 Online Learning

Arithmetic

Monday

Good Morning

Please mute and ensure your login name is your first name and class e.g. Ben 5F

This lesson will be recorded

LO: I am learning how
to subtract

Warm up

Complete the calculations.

a)

		8	4	3	4		
	-	2	1	0	4		

c)

		4	6	8	3	2		
	-	1	9	0	2	4		

b)

		£	8	8	2	0	0		
	-	£		6	1	0	0		

d)

		3	4	5	2	0		
	-			6	7	9		

$$45,322 - 3,210$$

M	HTh	TTh	Th	H	T	1s
---	-----	-----	----	---	---	----

$$563,423 - 43,230$$

M	HTh	TTh	Th	H	T	1s
---	-----	-----	----	---	---	----

Exchanging

M	HTh	TTh	Th	H	T	1s
---	-----	-----	----	---	---	----

$$\begin{array}{r}
 4562 \\
 - 2424 \\
 \hline
 \hline
 \end{array}$$

M	HTh	TTh	Th	H	T	1s
---	-----	-----	----	---	---	----

$$\begin{array}{r}
 325103 \\
 - 122024 \\
 \hline
 \hline
 \end{array}$$

a) $10,004 - 9,995 =$

M	HTh	TTh	Th	H	T	1s
---	-----	-----	----	---	---	----

b) $10,000 - 6,727 =$

M

HTh

TTh

Th

H

T

1s

Time for your Tasks

You will either be completing the orange, blue, green or purple tasks. You should have received a Marvellous Me telling you which one. There is also a document on the website with the answers in.

The tasks can be found on the Beechwood Website.

I will keep the Zoom call open until 12:00 to support and answer any questions you may have during the task. Please indicate if you need help by writing in the chat.

If you want us to look at your arithmetic and give you feedback please send a picture or email it to your child's class teacher or myself who will respond as soon as they can.

Year 5 Online Learning

Arithmetic

Tuesday

Good Morning

Please mute and ensure your login name is your first name and class e.g. Ben 5F

This lesson will be recorded

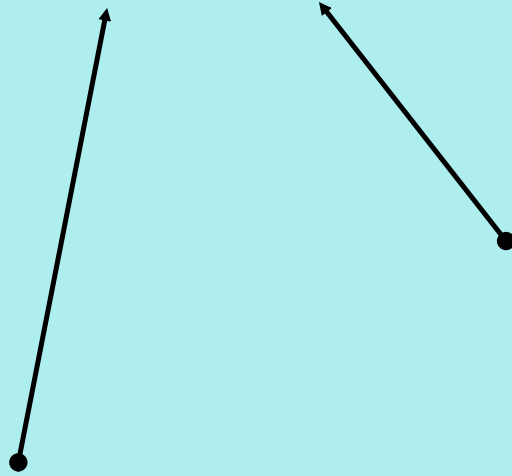
Task Time!

Orange and blue groups please can you start today's tasks. We are going to go through your next steps shortly.

Green and Purple groups we are going to talk about subtracting decimals before you start your tasks.

Recap

4.52



What about decimals?

$$45.31 - 21.21$$

$$4.93 - 2.31$$

You do

Complete the column subtractions.

a)

		5	•	6	4
-		3	•	1	2
		<hr/>			
			•		
		<hr/>			

c)

		8	•	0	9
-		3	•	8	1
		<hr/>			
			•		
		<hr/>			

b)

		5	•	6	4
-		3	•	1	5
		<hr/>			
			•		
		<hr/>			

d)

		1	2	•	0	2
-		1	1	•	3	8
		<hr/>				
				•		
		<hr/>				

© Math 2020

Place value holders

$$67.12 - 4.2$$

$$5.67 - 0.3$$

You do

Complete the subtractions.

a)

		2	•	3	6
	-	1	•	4	
		<hr/>			
			•		
		<hr/>			

c)

		7	•	3	
	-	1	•	1	5
		<hr/>			
			•		
		<hr/>			

b)

		6	•	1	5
	-	3	•	8	
		<hr/>			
			•		
		<hr/>			

d)

		2	4	•	4	
	-		3	•	1	2
		<hr/>				
				•		
		<hr/>				

4

Use the column method to work out the subtractions.

a) $13.59 - 1.82$

c) $5.6 - 1.39$

b) $73.84 - 9.2$

d) $18.2 - 3.64$

Have a go at these questions

a) $583,322 - 54,400$

b) $200,000 - 40,000$

c) $323,213 - 43,210$

d) $45.32 - 31.2$

e) $4.01 - 0.21$

f) $12.32 - 0.9$

g) $1,000,000 - 3453$

h) $675,000 - 675,675$

Task Time!

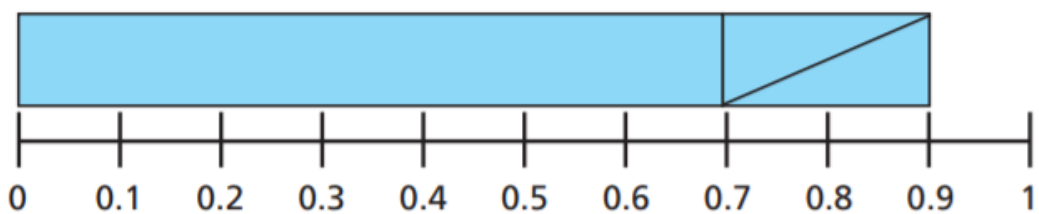
Green and purple groups please
can you start today's tasks. We
are going to go through your next
steps shortly.

Blue and orange groups welcome
back. We are going to spend the
rest of today's session doing some
questions together.

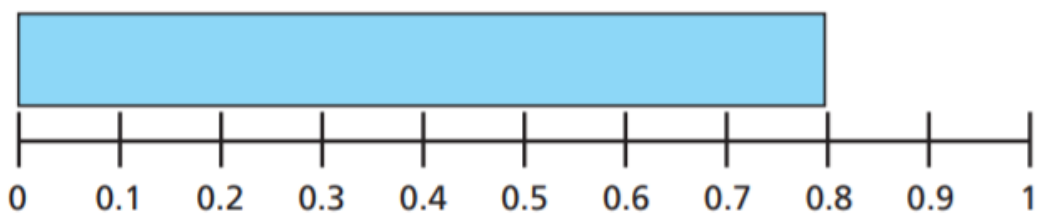
Work out the subtractions.

Use the number lines to help you.

a) $0.9 - 0.2 =$

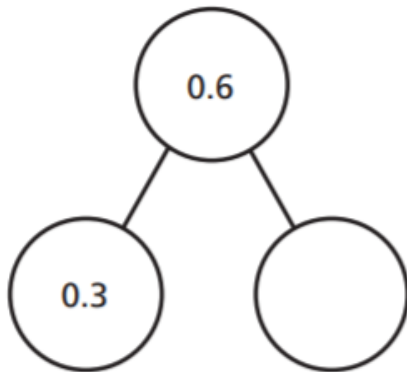


b) $0.8 - 0.1 =$

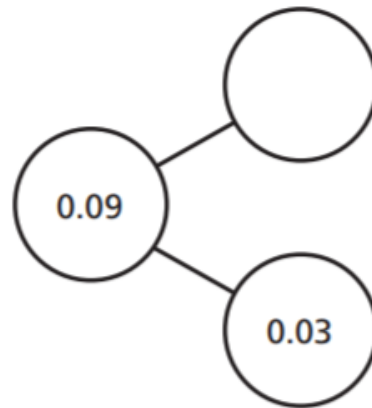


Complete the part-whole models.

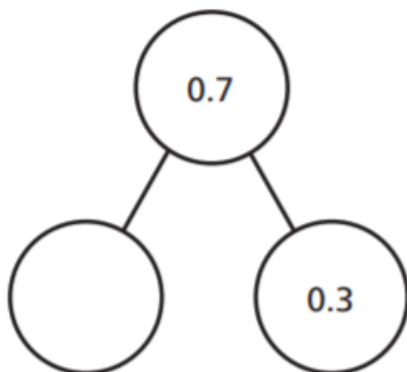
a)



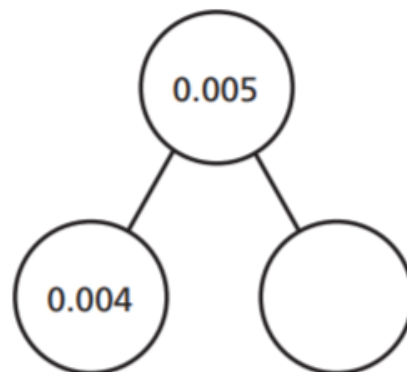
c)



b)



d)



a)

		0	•	8	9
	-	0	•	4	

			•		

c)

		0	•	7	7
	-	0	•	6	8

			•		

b)

		0	•	7	7
	-	0	•	6	4

			•		

d)

		0	•	7	
	-	0	•	2	5

			•		

T	1s	.	t	h
---	----	---	---	---

